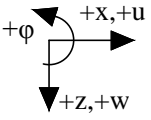
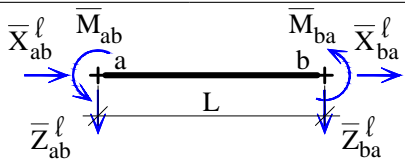
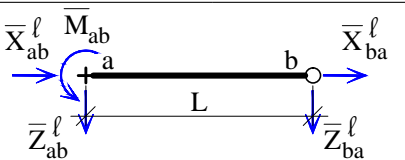
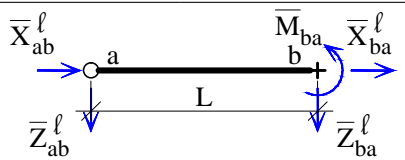
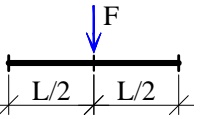
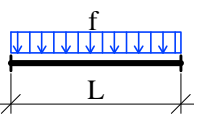
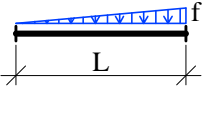
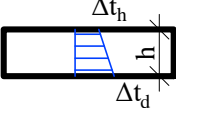
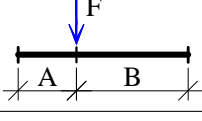
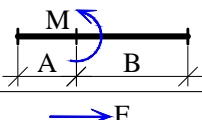
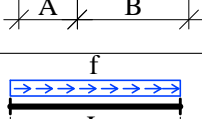
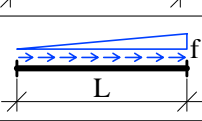
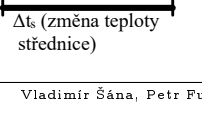
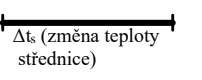


# DEFORMAČNÍ METODA – Koncové momenty a síly od prutového zatížení

	prut typu V-V	prut typu V-K	prut typu K-V
			
	$\bar{M}_{ab} = \frac{FL}{8}$ $\bar{M}_{ba} = -\frac{FL}{8}$ $\bar{Z}_{ab} = -\frac{F}{2}$ $\bar{Z}_{ba} = -\frac{F}{2}$	$\bar{M}_{ab} = \frac{3}{16}FL$ <b>x</b> $\bar{Z}_{ab} = -\frac{11F}{16}$ $\bar{Z}_{ba} = -\frac{5F}{16}$	<b>x</b> $\bar{M}_{ba} = -\frac{3}{16}FL$ $\bar{Z}_{ab} = -\frac{5F}{16}$ $\bar{Z}_{ba} = -\frac{11F}{16}$
	$\bar{M}_{ab} = \frac{fL^2}{12}$ $\bar{M}_{ba} = -\frac{fL^2}{12}$ $\bar{Z}_{ab} = -\frac{fL}{2}$ $\bar{Z}_{ba} = -\frac{fL}{2}$	$\bar{M}_{ab} = \frac{fL^2}{8}$ <b>x</b> $\bar{Z}_{ab} = -\frac{5fL}{8}$ $\bar{Z}_{ba} = -\frac{3fL}{8}$	<b>x</b> $\bar{M}_{ba} = -\frac{fL^2}{8}$ $\bar{Z}_{ab} = -\frac{3fL}{8}$ $\bar{Z}_{ba} = -\frac{5fL}{8}$
	$\bar{M}_{ab} = \frac{fL^2}{30}$ $\bar{M}_{ba} = -\frac{fL^2}{20}$ $\bar{Z}_{ab} = -\frac{3fL}{20}$ $\bar{Z}_{ba} = -\frac{7fL}{20}$	$\bar{M}_{ab} = \frac{7fL^2}{120}$ <b>x</b> $\bar{Z}_{ab} = -\frac{27fL}{120}$ $\bar{Z}_{ba} = -\frac{33fL}{120}$	<b>x</b> $\bar{M}_{ba} = -\frac{fL^2}{15}$ $\bar{Z}_{ab} = -\frac{fL}{10}$ $\bar{Z}_{ba} = -\frac{2fL}{5}$
	$\bar{M}_{ab} = EI\alpha_t \frac{\Delta t_d - \Delta t_h}{h}$ $\bar{M}_{ba} = -EI\alpha_t \frac{\Delta t_d - \Delta t_h}{h}$ $\bar{Z}_{ab} = 0$ $\bar{Z}_{ba} = 0$	$\bar{M}_{ab} = \frac{3}{2}EI\alpha_t \frac{\Delta t_d - \Delta t_h}{h}$ <b>x</b> $\bar{Z}_{ab} = -\frac{3EI}{2L}\alpha_t \frac{\Delta t_d - \Delta t_h}{h}$ $\bar{Z}_{ba} = \frac{3EI}{2L}\alpha_t \frac{\Delta t_d - \Delta t_h}{h}$	<b>x</b> $\bar{M}_{ba} = -\frac{3}{2}EI\alpha_t \frac{\Delta t_d - \Delta t_h}{h}$ $\bar{Z}_{ab} = \frac{3EI}{2L}\alpha_t \frac{\Delta t_d - \Delta t_h}{h}$ $\bar{Z}_{ba} = -\frac{3EI}{2L}\alpha_t \frac{\Delta t_d - \Delta t_h}{h}$
	$\bar{M}_{ab} = \frac{FAB^2}{L^2}$ $\bar{M}_{ba} = -\frac{FA^2B}{L^2}$	$\bar{M}_{ab} = \frac{FAB}{2L^2}(B+L)$ <b>x</b>	<b>x</b> $\bar{M}_{ba} = -\frac{FAB}{2L^2}(A+L)$
$\bar{Z}_{ab}, \bar{Z}_{ba}$ se dopočítají z podmínek rovnováhy prutu			
	$\bar{M}_{ab} = \frac{MB}{L^2}(2L-3B)$ $\bar{M}_{ba} = \frac{MA}{L^2}(2L-3A)$	$\bar{M}_{ab} = \frac{M}{2L^2}(L^2-3B^2)$ <b>x</b>	<b>x</b> $\bar{M}_{ba} = \frac{M}{2L^2}(L^2-3A^2)$
$\bar{Z}_{ab}, \bar{Z}_{ba}$ se dopočítají z podmínek rovnováhy prutu			
	$\bar{X}_{ab} = -\frac{FB}{L}$ $\bar{X}_{ba} = -\frac{FA}{L}$	$\bar{X}_{ab} = -\frac{FB}{L}$ $\bar{X}_{ba} = -\frac{FA}{L}$	$\bar{X}_{ab} = -\frac{FB}{L}$ $\bar{X}_{ba} = -\frac{FA}{L}$
	$\bar{X}_{ab} = -\frac{fL}{2}$ $\bar{X}_{ba} = -\frac{fL}{2}$	$\bar{X}_{ab} = -\frac{fL}{2}$ $\bar{X}_{ba} = -\frac{fL}{2}$	$\bar{X}_{ab} = -\frac{fL}{2}$ $\bar{X}_{ba} = -\frac{fL}{2}$
	$\bar{X}_{ab} = -\frac{fL}{6}$ $\bar{X}_{ba} = -\frac{fL}{3}$	$\bar{X}_{ab} = -\frac{fL}{6}$ $\bar{X}_{ba} = -\frac{fL}{3}$	$\bar{X}_{ab} = -\frac{fL}{6}$ $\bar{X}_{ba} = -\frac{fL}{3}$
	$\bar{X}_{ab} = EA\alpha_t\Delta t_s$ $\bar{X}_{ba} = -EA\alpha_t\Delta t_s$	$\bar{X}_{ab} = EA\alpha_t\Delta t_s$ $\bar{X}_{ba} = -EA\alpha_t\Delta t_s$	$\bar{X}_{ab} = EA\alpha_t\Delta t_s$ $\bar{X}_{ba} = -EA\alpha_t\Delta t_s$